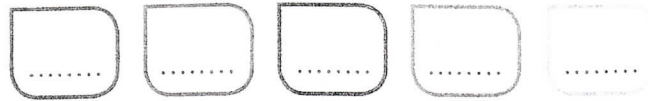


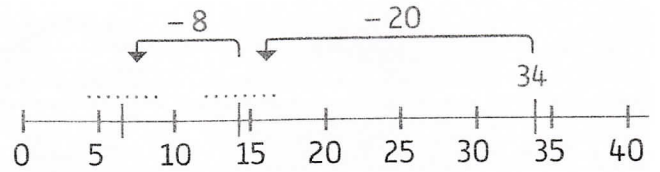
**CALCUL MENTAL**  
Énoncer des additions (nombres à 2 chiffres).



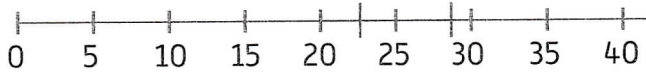
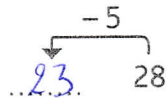
**1** Utilise la demi-droite graduée pour calculer en ligne comme Agatha.



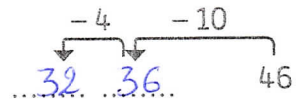
Pour calculer  $34 - 28$ , je fais des sauts en reculant sur la demi-droite graduée :



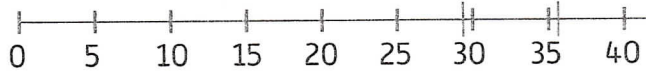
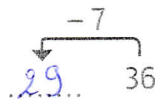
$28 - 5 = 23$



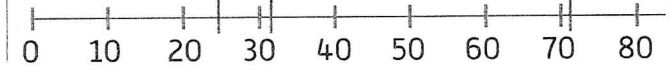

$46 - 14 = 32$



$36 - 7 = 29$

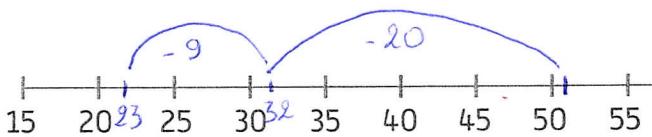


$72 - 48 = 24$

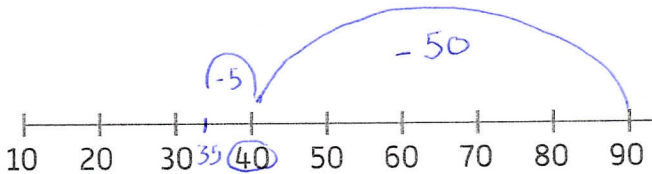


**2** Utilise la demi-droite graduée pour calculer en ligne.

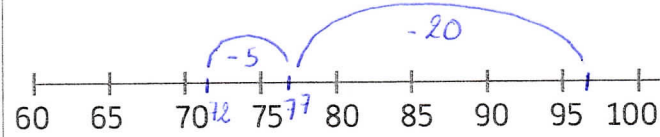
$52 - 29 = 23$



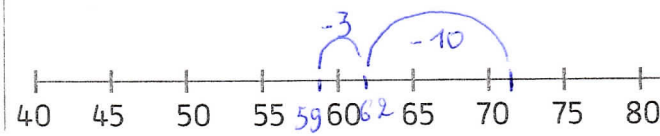
$90 - 55 = \dots\dots\dots$



$97 - 25 = 72$



$72 - 13 = 59$



**3** **PROBLÈME** Nino possède 42 BD, 63 figurines et 56 peluches.

a. Il a prêté 8 BD à Lali. Combien de BD lui reste-t-il ?

$42 - 8 = 34$  BD

b. Il ne retrouve que 47 figurines. Combien de figurines a-t-il perdues ?

$63 - 47 = 16$  figurines

c. Il donne 18 peluches. Combien de peluches lui restera-t-il ?

$56 - 18 = 38$  peluches